

Summer Reading for Students Entering Grade 3

Choose one of the following books to read during the summer, and complete a book report form for the book. Try to choose a book that will interest you. The book report will be due the first day of school.

Please choose one of the following:

- **Magic Treehouse (any book in the series)- Mary Pope Osborne**
- **Junie B. Jones (any book in the series) - Barbara Park**
- **Fudge- Judy Blume**
- **Desmond Cole Ghost Patrol: The Scary Library Shusher- Andres Miedoso**
- **Dangerous Journeys: Exploring Mount Everest- Betsy Rathburn**

Enjoy Reading!



Name: _____

Book Report

Title: _____

Author: _____

Setting:

Draw a picture of the setting

Characters:

Draw a picture of the main characters

This book was about:

What did you like about the book? Why?

Willie the Turtle Journal


Take Willie on adventures this summer and keep a journal. You will write a total of 10 entries for the summer. Each entry should be at least 4-5 sentences long, each written on their own page. Entries should be written as a letter to your classmates. Be creative and include pictures. On each entry you will include a date, as well as an opening and closing for your letter.

You will design the cover of your journal as well. Your cover must include your first and last name, the title "Willie the Turtle Journal", and a picture of your favorite adventure with Willie.

Sample:

Date of entry
Dear Classmate,
Today, Willie and I went for a walk through Forest Park. We saw a lot of animals running around. We even got to see horses on the trails! It was a great day.
From, <i>Your name</i>

Where are you taking me today!



Name _____

3rd Grade
Summer Math Packet

Find the difference.

$$\begin{array}{r} 1. \quad 71 \\ - 49 \\ \hline \\ \hline \end{array}$$

$$\begin{array}{r} 2. \quad 66 \\ - 59 \\ \hline \\ \hline \end{array}$$

$$\begin{array}{r} 3. \quad 26 \\ - 19 \\ \hline \\ \hline \end{array}$$

$$\begin{array}{r} 4. \quad 20 \\ - 16 \\ \hline \\ \hline \end{array}$$

$$\begin{array}{r} 5. \quad 96 \\ - 19 \\ \hline \\ \hline \end{array}$$

$$\begin{array}{r} 6. \quad 77 \\ - 18 \\ \hline \\ \hline \end{array}$$

$$\begin{array}{r} 7. \quad 75 \\ - 27 \\ \hline \\ \hline \end{array}$$

$$\begin{array}{r} 8. \quad 56 \\ - 49 \\ \hline \\ \hline \end{array}$$

$$\begin{array}{r} 9. \quad 78 \\ - 49 \\ \hline \\ \hline \end{array}$$

$$\begin{array}{r} 10. \quad 91 \\ - 47 \\ \hline \\ \hline \end{array}$$

$$\begin{array}{r} 11. \quad 65 \\ - 57 \\ \hline \\ \hline \end{array}$$

$$\begin{array}{r} 12. \quad 91 \\ - 84 \\ \hline \\ \hline \end{array}$$

Choose the missing number.

$$25 \text{ tens} = \square$$

- a. 25 b. 250

Marshall had 80¢.
He bought an eraser that
costs 25¢. Draw coins to
show how much change
Marshall got back.

The Mehta family is taking a road trip.
They drove 289 miles on Saturday, and
306 miles on Sunday. How many miles
did they drive in all?

289	306
?	


answer: _____ miles

Shade in an array of 4 rows of 3 and
complete the number sentence.

_____ + _____ + _____ + _____ = _____

Subtract.

	Hundreds	Tens	Ones
	5	0	0
-		6	2
<hr/>			



Find the total value of the money shown.




answer: _____

There are 24 students in Mr. Garcia's class, 26 students in Ms. Weir's class, 25 students in Mrs. Hart's class and 24 students in Mr. Hornsby's class. How many students are in all four classes combined?

answer: _____ students

Shade in an array of 2 rows of 5 and complete the number sentence.



2 rows of 5

_____ + _____ = _____

Subtract.

	Hundreds	Tens	Ones
	8	0	0
-	3	5	6
<hr/>			

Choose the missing number.

28 tens =

a. 280

b. 28